



Wochenplan

vom 18.01. bis 22.01.2021

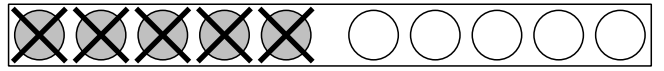
		Name:
Lernbereich	Aufgaben	Fertig
 Deutsch	Buchstabeneinführung Rr Einführung online!	
	Blaue Lola S. 30-38	
	Eintrag ins Schreiblearn-Heft Rr Vorlage bitte einkleben!	
	Lesen Lesebuch S. 24	
 Mathe	Arbeitsblätter Minus jeden Tag eine Seite	
	Geometrie rotes MiniMax S. 22/23	
	Größen und Sachrechnen gelbes MiniMax S. 2-4	
 Sachunterricht	AB "Die Jahreszeiten"	
	 Quiz https://kurzelinks.de/7r2h	
 Kreativ	Meine Lieblingsjahreszeit Male deine Lieblingsjahreszeit	
 Zusatz	Schreib-/Lesestern	
	Anton :)	
	Mit der Schreibtabelle schreiben kleine grüne Lola bis S. 18	

Name: _____

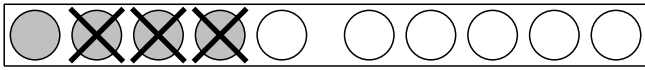
Ich übe MINUS



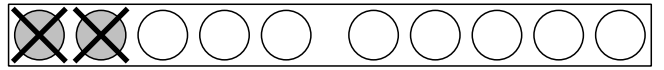
Los geht's!



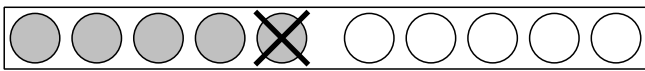
$$\underline{\quad} - \underline{\quad} = \underline{\quad}$$



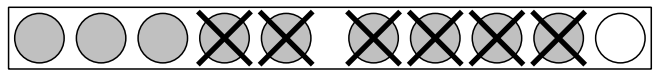
$$\underline{\quad} - \underline{\quad} = \underline{\quad}$$



$$\underline{\quad} - \underline{\quad} = \underline{\quad}$$



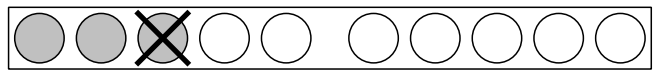
$$\underline{\quad} - \underline{\quad} = \underline{\quad}$$



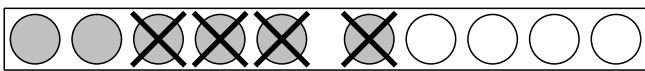
$$\underline{\quad} - \underline{\quad} = \underline{\quad}$$



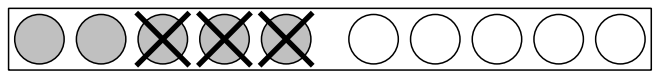
$$\underline{\quad} - \underline{\quad} = \underline{\quad}$$



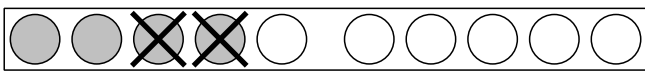
$$\underline{\quad} - \underline{\quad} = \underline{\quad}$$



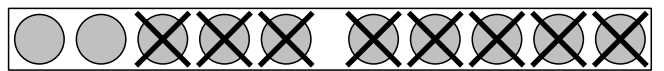
$$\underline{\quad} - \underline{\quad} = \underline{\quad}$$



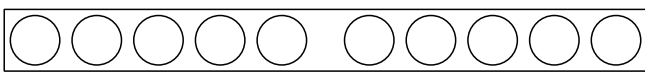
$$\underline{\quad} - \underline{\quad} = \underline{\quad}$$



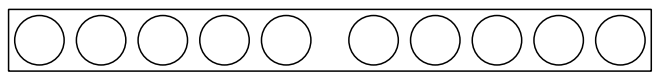
$$\underline{\quad} - \underline{\quad} = \underline{\quad}$$



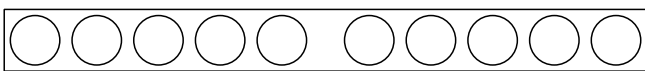
$$\underline{\quad} - \underline{\quad} = \underline{\quad}$$



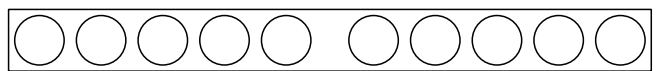
$$10 - 5 = \underline{\quad}$$



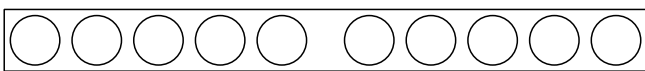
$$9 - 8 = \underline{\quad}$$



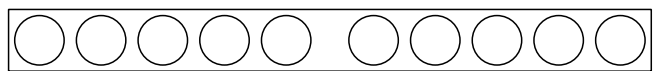
$$7 - 4 = \underline{\quad}$$



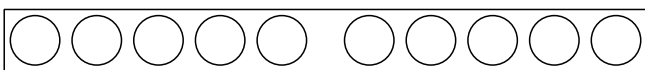
$$7 - 2 = \underline{\quad}$$



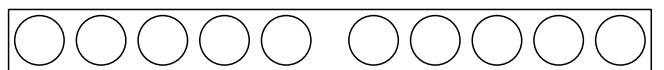
$$3 - 2 = \underline{\quad}$$



$$5 - 4 = \underline{\quad}$$



$$7 - 7 = \underline{\quad}$$



$$7 - 5 = \underline{\quad}$$

Ich rechne im Kopf



$10 - 6 = \underline{\quad}$

$7 - 6 = \underline{\quad}$

$10 - 1 = \underline{\quad}$

$9 - 2 = \underline{\quad}$

$9 - 8 = \underline{\quad}$

$9 - 3 = \underline{\quad}$

$8 - 5 = \underline{\quad}$

$7 - 5 = \underline{\quad}$

$8 - 4 = \underline{\quad}$

$9 - 0 = \underline{\quad}$

$10 - 0 = \underline{\quad}$

$7 - 2 = \underline{\quad}$

$8 - 1 = \underline{\quad}$

$10 - 8 = \underline{\quad}$

$10 - 9 = \underline{\quad}$

$8 - 2 = \underline{\quad}$

$8 - 5 = \underline{\quad}$

$9 - 3 = \underline{\quad}$

$8 - 7 = \underline{\quad}$

$9 - 4 = \underline{\quad}$

$10 - 5 = \underline{\quad}$

$7 - 6 = \underline{\quad}$

$9 - 6 = \underline{\quad}$

$10 - 7 = \underline{\quad}$

$7 - 2 = \underline{\quad}$

$9 - 9 = \underline{\quad}$

$9 - 8 = \underline{\quad}$

$8 - 1 = \underline{\quad}$

$10 - 3 = \underline{\quad}$

$10 - 9 = \underline{\quad}$



$7 - \underline{\quad} = 4$

$7 - \underline{\quad} = 1$

$8 - \underline{\quad} = 3$

$6 - \underline{\quad} = 4$

$5 - \underline{\quad} = 2$

$7 - \underline{\quad} = 6$

$9 - \underline{\quad} = 6$

$7 - \underline{\quad} = 6$


$6 - \underline{\quad} = 1$

$7 - \underline{\quad} = 5$


$7 - \underline{\quad} = 4$

$8 - \underline{\quad} = 4$


Rechengeschichten - MINUS



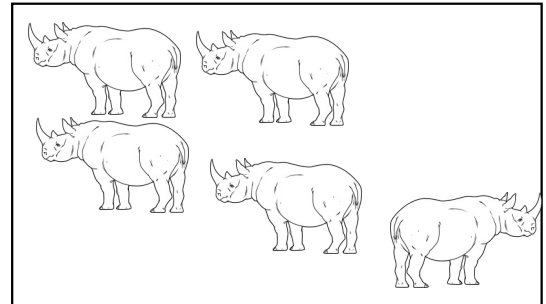
5	-	2	=	
---	---	---	---	--




	-		=	
--	---	--	---	--




	-		=	
--	---	--	---	--




	-		=	
--	---	--	---	--



	-		=	
--	---	--	---	--



	-		=	
--	---	--	---	--



	-		=	
--	---	--	---	--



	-		=	
--	---	--	---	--

PLUS und MINUS - Aufgaben

$$\underline{\quad} - 1 = 9$$

$$\underline{\quad} + 3 = 6$$

$$5 - 2 = \underline{\quad}$$

$$8 + \underline{\quad} = 10$$

$$\underline{\quad} + 1 = 5$$

$$2 + \underline{\quad} = 5$$

$$5 + 5 = \underline{\quad}$$

$$\underline{\quad} - 4 = 3$$

$$\underline{\quad} + 7 = 10$$

$$10 - \underline{\quad} = 7$$

$$1 + 5 = \underline{\quad}$$

$$10 - \underline{\quad} = 6$$

$$3 + \underline{\quad} = 10$$

$$6 - \underline{\quad} = 3$$

$$8 - 1 = \underline{\quad}$$

$$\underline{\quad} - 1 = 6$$

$$\underline{\quad} + 6 = 7$$

$$\underline{\quad} + 2 = 8$$

$$8 - 3 = \underline{\quad}$$

$$\underline{\quad} - 4 = 1$$

$$8 - 5 = \underline{\quad}$$

$$7 + \underline{\quad} = 8$$

$$4 + \underline{\quad} = 6$$

$$8 + \underline{\quad} = 9$$

$$5 - \underline{\quad} = 2$$

$$\underline{\quad} - 5 = 4$$

$$5 - 1 = \underline{\quad}$$

$$5 + 1 = \underline{\quad}$$

$$\underline{\quad} - 5 = 3$$

$$5 + \underline{\quad} = 6$$

$$\underline{\quad} - 6 = 2$$

$$\underline{\quad} + 7 = 8$$

$$\underline{\quad} + 6 = 10$$

$$4 + 4 = \underline{\quad}$$

$$2 + \underline{\quad} = 5$$

$$6 - \underline{\quad} = 4$$

$$5 + 3 = \underline{\quad}$$

$$10 - \underline{\quad} = 2$$

$$\underline{\quad} + 1 = 8$$

$$8 - \underline{\quad} = 4$$

$$6 + \underline{\quad} = 8$$

$$3 + \underline{\quad} = 7$$

$$\underline{\quad} - 6 = 4$$

$$\underline{\quad} - 5 = 2$$

$$\underline{\quad} + 2 = 3$$

$$\underline{\quad} + 6 = 10$$

$$9 - 1 = \underline{\quad}$$

$$\underline{\quad} - 5 = 5$$

$$6 - 4 = \underline{\quad}$$

$$6 - 1 = \underline{\quad}$$

$$1 + \underline{\quad} = 10$$

Das hast du
toll gemacht!





HSU

Name: _____




Die Jahreszeiten




Schreibe die Wörter unter das richtige Bild.

Sommer Frühling Winter Herbst











HSU



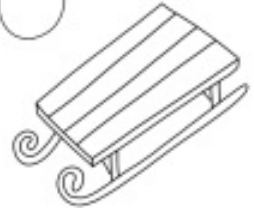
Name: _____



Die Jahreszeiten



Verbinde richtig!





AR

Ar

ARr

rot rosa

reiten

der Ritter

Der Ritter reitet ein Pferd.